




Place Value to 1,000



Name

Date



Place Value to 1,000

Circle the digit in the hundreds place.

723

Circle the digit in the ones place.

658

Circle the digit in the tens place.


199

Circle the digit in the ones place.

245

Circle the digit in the hundreds place.

437



Place Value to 1,000

Use the digits to form a number with 2 in the ones place.

--	--	--

Digits to use:

1	2	8
---	---	---

Write the number in expanded form.

--

Use the digits to form a number with 8 in the hundreds place.


--	--	--

Digits to use:

4	8	9
---	---	---

Write the number in expanded form.

--



Place Value to 1,000

Use the digits to form a number with 5 in the tens place.

--	--	--

Digits to use:

5 **7** **9**

Write the number in word form.

--

Use the digits to form a number with 6 in the hundreds place.


--	--	--

Digits to use:

3 **4** **6**

Write the number in word form.

--



Place Value to 1,000

$$749 = \boxed{} + 40 + \boxed{}$$

$$615 = \boxed{} \text{ hundred } \boxed{}$$

$$297 = 200 + \boxed{} + \boxed{}$$

$$961 = \boxed{} \text{ hundred } \boxed{}$$

7

90

six


nine

9

700

sixty-one

fifteen



Place Value to 1,000

Draw lines to show the matching numbers.

539

•

• $900 + 50 + 3$

953

•

• 30 tens 5 ones

513

•

• five hundred thirty-nine

305

•

• $500 + 90 + 3$

593

•

• 5 hundreds 1 ten 3 ones